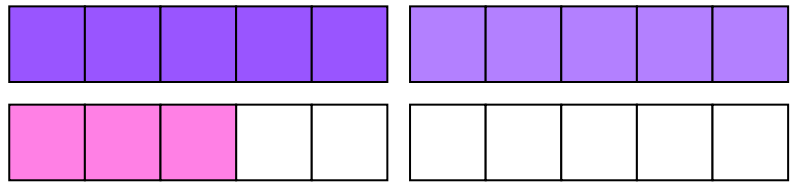


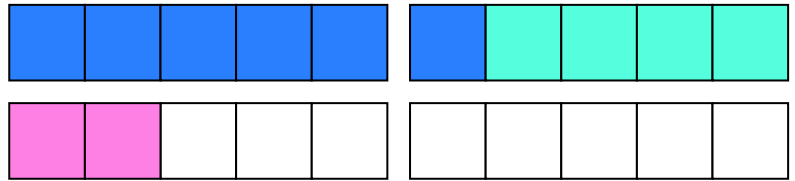
Dodawanie w zakresie 0 - 20.

1. Uzupełnij działania według podanego schematu.


$$\begin{array}{c} 5 + 5 + 3 = \\ \swarrow \quad \searrow \\ 10 + 3 = 13 \end{array}$$



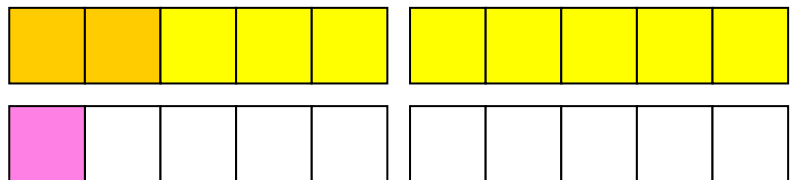
$$\begin{array}{c} 6 + 2 + 4 = \\ \swarrow \quad \searrow \\ 10 + 2 = 12 \end{array}$$



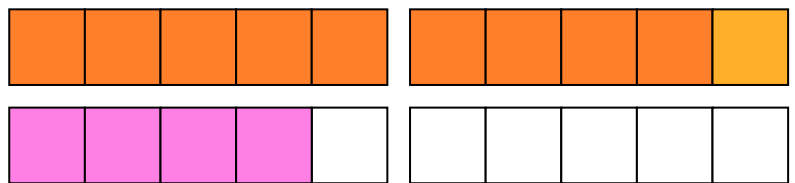
$$\begin{array}{c} 6 + 3 + 7 = \\ \swarrow \quad \searrow \\ 10 + 6 = 16 \end{array}$$



$$\begin{array}{c} 2 + 1 + 8 = \\ \swarrow \quad \searrow \\ 10 + 1 = 11 \end{array}$$



$$\begin{array}{c} 9 + 1 + 4 = \\ \swarrow \quad \searrow \\ 10 + 4 = 14 \end{array}$$



$$\begin{array}{c} 5 + 0 + 10 = \\ \swarrow \quad \searrow \\ 10 + 5 = 15 \end{array}$$

